



UNIVERSITY OF CAMBRIDGE INTERNATIONAL EXAMINATIONS
International General Certificate of Secondary Education

CANDIDATE NAME

CENTRE NUMBER

CANDIDATE NUMBER

* 6 0 6 2 6 6 2 1 1 2 *

CO-ORDINATED SCIENCES

0654/52

Paper 5 Practical Test

October/November 2011

2 hours

Candidates answer on the Question Paper.

Additional Materials: As listed in Instructions to Supervisors

READ THESE INSTRUCTIONS FIRST

Write your Centre number, candidate number and name on all the work you hand in.
Write in dark blue or black pen.
You may use a pencil for any diagrams, graphs or rough working.
Do not use staples, paper clips, highlighters, glue or correction fluid.
DO NOT WRITE IN ANY BARCODES.

Answer **all** questions.
Chemistry practical notes for this paper are printed on page 12.

At the end of the examination, fasten all your work securely together.
The number of marks is given in brackets [] at the end of each question or part question.

For Examiner's Use	
1	
2	
3	
Total	

This document consists of **13** printed pages and **3** blank pages.

1 You are going to investigate what affects the diffusion of hydrochloric acid into agar. You are provided with an agar block (of dimensions 20 mm x 10 mm x 10 mm) that contains phenolphthalein indicator and an alkali. Phenolphthalein is purple in pH greater than 8 and colourless in pH less than 8.

- (a) (i)
- Cut the agar block in half, producing two blocks of size 10 mm x 10 mm x 10 mm (as shown in Fig. 1.1).
 - Keep one of these blocks intact (this is block **A**) and cut the other in half again (as shown in Fig. 1.1).
 - Keep one of these blocks intact (this is block **B**) and cut the other in half again. Discard one of these (as shown in Fig. 1.1.) The remaining block is block **C**.
 - You will now have three agar blocks of different surface areas.
 - Label the test-tubes **A**, **B**, and **C**.
 - Place about 20 cm³ of dilute hydrochloric acid in each of the three test-tubes **A**, **B** and **C**.
 - Using tweezers, drop each block into separate test-tubes (as shown in Fig. 1.1) as quickly as possible and start the stopclock.
 - Record the time taken, in Table 1.1, for each block to go completely colourless (as shown in Fig. 1.2). [3]

While you are waiting for the blocks to become colourless, you can be performing the calculations needed to complete Table 1.1.

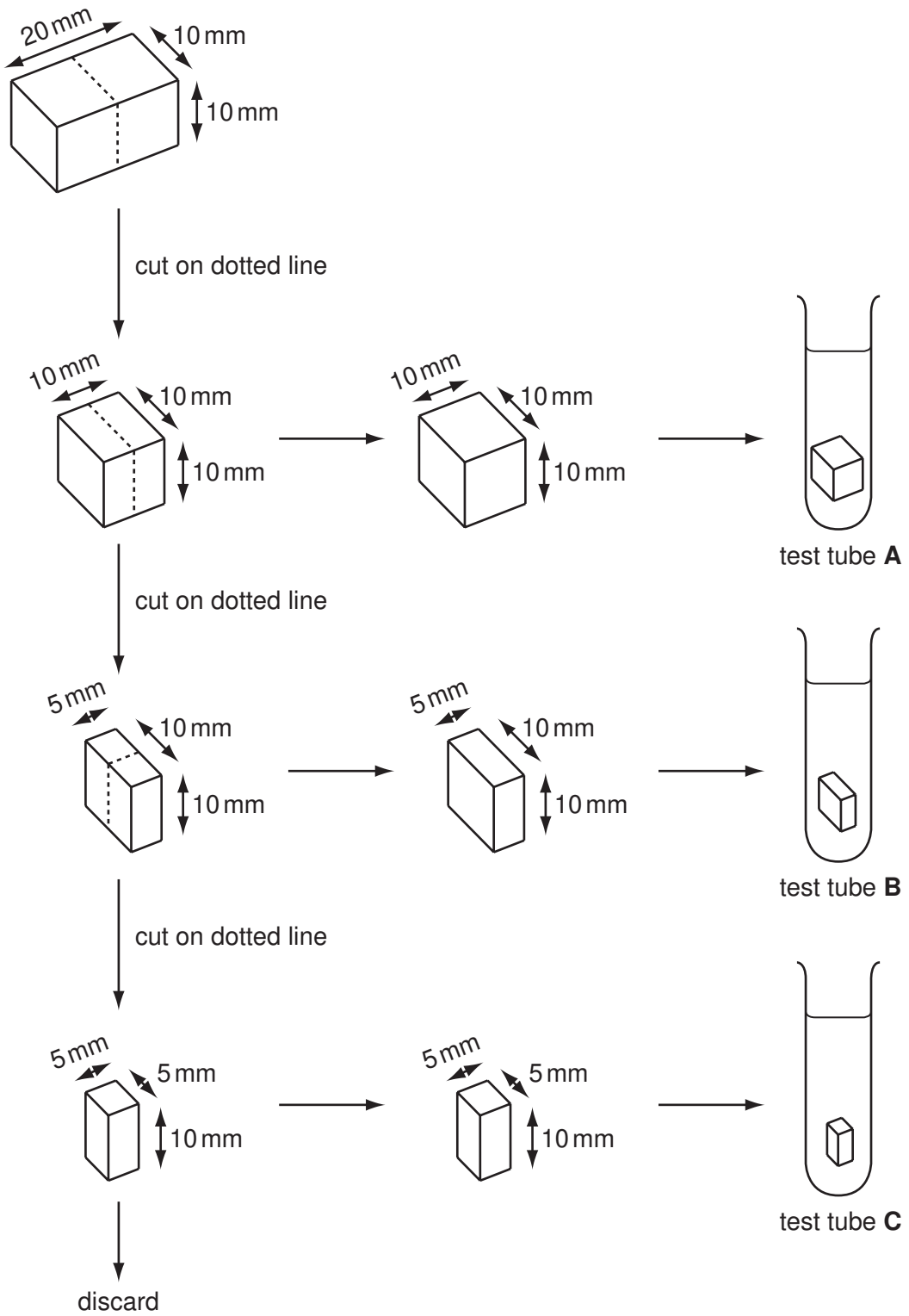


Fig. 1.1

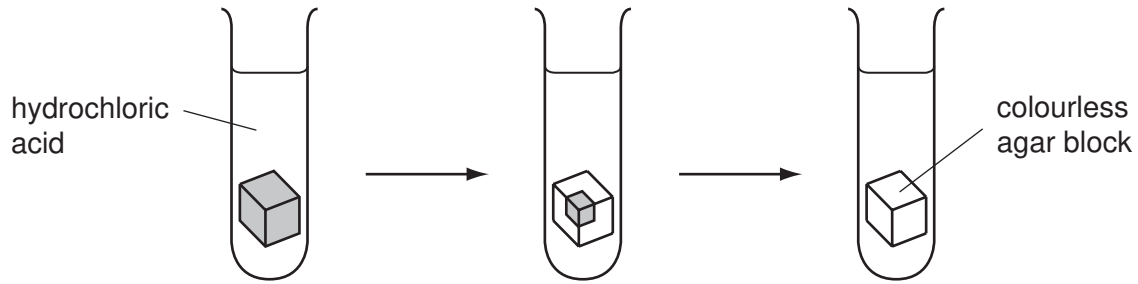


Fig. 1.2

Table 1.1

tube	A	B	C
cube dimensions / mm	10 x 10 x 10	10 x 10 x 5	10 x 5 x 5
volume of block / mm ³			
surface area of block / mm ²	600	400	250
surface area to volume ratio / mm ⁻¹			
time taken for block to go colourless / s			

(ii) Calculate the volume of each block. Record the volumes in Table 1.1.

[1]

(iii) The surface to volume ratio is calculated using the following formula:

$$\text{ratio} = \frac{\text{surface area of block / mm}^2}{\text{volume of block / mm}^3}$$

Calculate the surface area to volume ratio for each block and record it in Table 1.1.

[1]

(iv) Explain why the blocks go colourless when placed in the acid.

.....
.....
.....
..... [2]

(v) Describe and explain the effect that the decrease in volume of the block has on the time taken for the colour to change.

.....
.....
.....
..... [2]

(b)

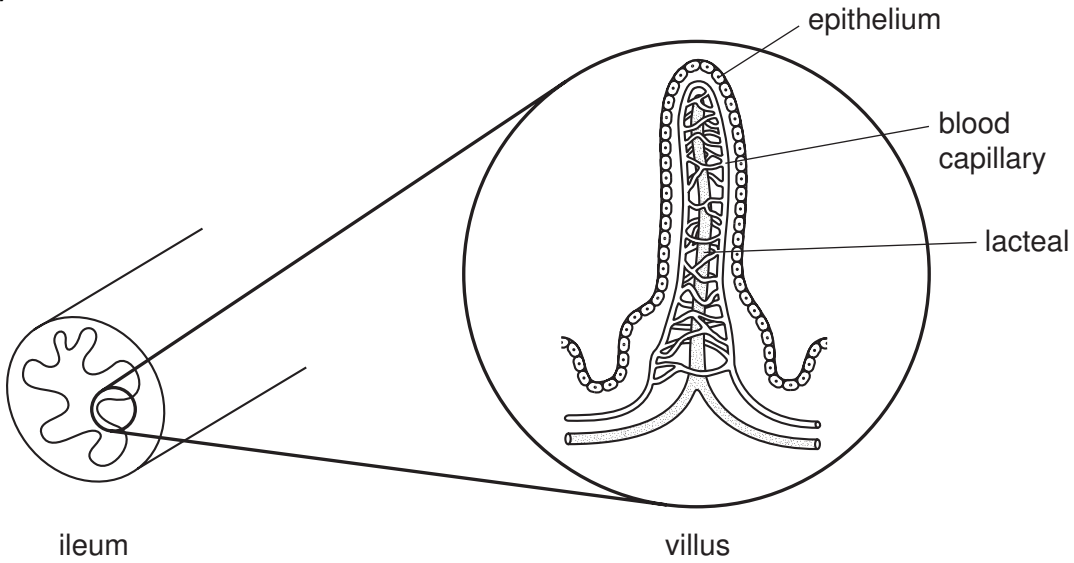


Fig. 1.3

Fig. 1.3 shows a cross-section through the small intestine and a single villus.

Suggest, using your findings from part (a)(v) and your own knowledge, how absorption of food molecules into the bloodstream is helped by the structure of the villi.

.....

.....

.....

..... [3]

(c) Describe an experiment to investigate how increasing the concentration of hydrochloric acid affects the rate of diffusion of the acid into agar.

.....

.....

.....

..... [3]



Please turn over for Question 2.

2 Carry out the following tests on solid **X** which is a mixture of two salts.

Record your observations and conclusions in the appropriate boxes in Table 2.1.

Table 2.1

test	observation	conclusion
(a) Mix one spatula full of solid X with two spatulas full of calcium hydroxide in a hard glass test-tube. Heat gently. Test any gas with moist blue and red litmus papers.		
 [1] [2]
(b) Prepare about 20 cm ³ of a dilute solution of X in water for use in the tests below.		
(i) To a portion of the solution of X , in a test-tube, slowly add aqueous sodium hydroxide until there is no further change. [2] [1]
(ii) To another portion of the solution of X , very slowly add aqueous ammonia until there is no further change. [1]	
(iii) To another portion of the solution of X , add dilute hydrochloric acid. [1] [1]
(iv) Acidify another portion of the solution of X with dilute nitric acid, then add barium nitrate solution. [1] [1]

(v) Acidify another portion of the solution of X with dilute nitric acid, then add silver nitrate solution. [1] [1]
---	-----------------------------	-----------------------------

(c) Suggest names for the two salts in mixture **X**.

..... and [2]

- 3 (a) You are going to investigate how the displacement of light passing through a rectangular glass block depends on the angle of incidence.

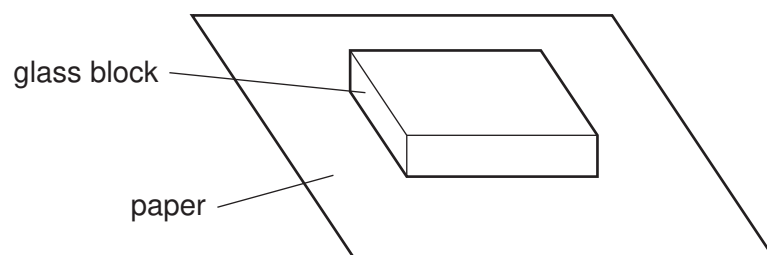


Fig. 3.1

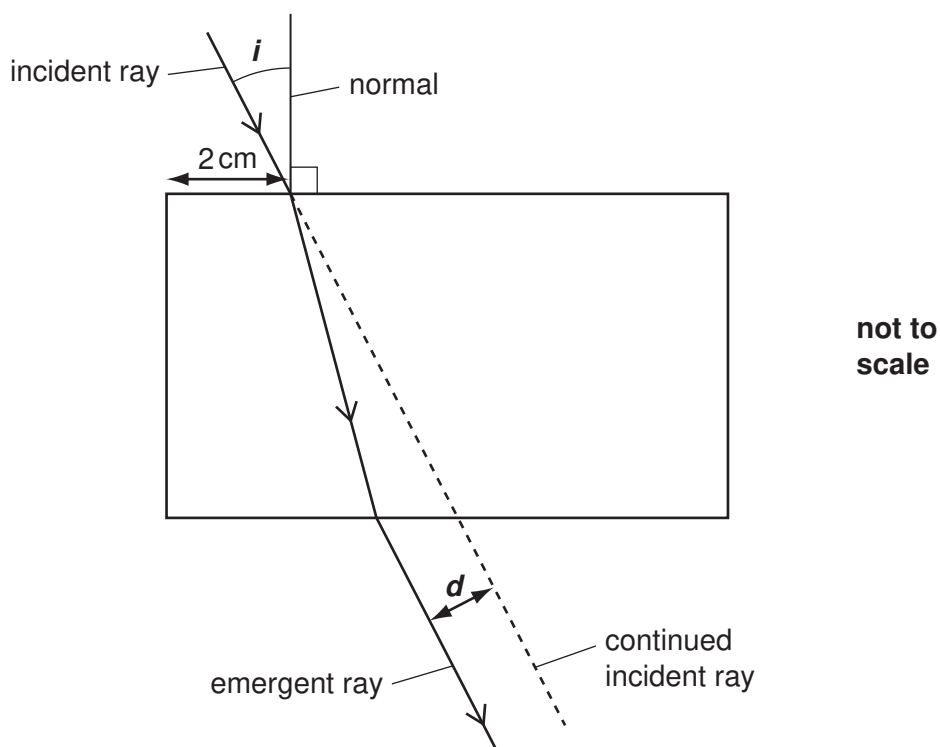


Fig. 3.2


- Place the glass block on the centre of the paper as shown in Fig. 3.1. Using a pencil, draw carefully around the block.
- Remove the block and construct a normal, 2 cm from the end of one of the long sides as shown in Fig. 3.2. Using a protractor, draw and label lines to represent incident rays with angles of incidence i of 20° , 40° , 60° and 80° .
- Replace the block carefully in the area marked on the paper. Place two pins about 4 cm apart on the incident ray for angle $i = 20^\circ$.
- Look through the block from the other side and place two more pins (on the emergent ray) in line with the pins on the incident ray.
- Remove the block and draw a line to represent the emergent ray. Then continue the incident ray as shown by the dotted line in Fig. 3.2. Now measure the displacement d of the incident ray as shown in Fig. 3.2. Record the value of d in mm in Table 3.1.
- Repeat for the other angles of incidence $i = 40^\circ$, 60° , and 80° .

Table 3.1

angle of incidence $i/^\circ$	displacement d/mm
0	0
20	
40	
60	
80	

[5]

- (b) (i) Plot a graph of displacement d (vertical axis) against angle of incidence i . You will need to extend the axes to include $i = 90^\circ$. Draw the best **curve** through your points extending the curve to $i = 90^\circ$.



[3]

- (ii) Explain how you can tell that the displacement d is **not** proportional to the angle of incidence i .

.....
 [1]

- (iii) Using your graph, find the value of the displacement, d_{90} , when $i = 90^\circ$.

Show how you did this on the graph.

$$d_{90} = \dots\dots\dots \text{ mm} \quad [2]$$

- (iv) Measure and record w , the width of your glass block, as shown in Fig. 3.3.

$$w = \dots\dots\dots \text{ mm} \quad [1]$$



Fig. 3.3

- (v) The accuracy, a , of your experiment may be calculated using the formula

$$a = \frac{d_{90}}{w} \times 100$$

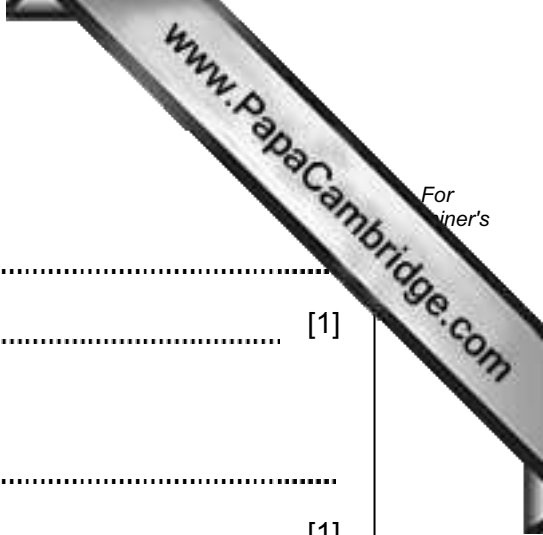
$$a = \dots\dots\dots \% \quad [1]$$

(c) (i) Identify **one** source of error in your experiment.

.....
..... [1]

(ii) Suggest **one** way of reducing the error identified in (c)(i).

.....
..... [1]



CHEMISTRY PRACTICAL NOTES

Test for anions

<i>anion</i>	<i>test</i>	<i>test result</i>
carbonate (CO_3^{2-})	add dilute acid	effervescence, carbon dioxide produced
chloride (Cl^-) [in solution]	acidify with dilute nitric acid, then add aqueous silver nitrate	white ppt.
nitrate (NO_3^-) [in solution]	add aqueous sodium hydroxide then aluminium foil; warm carefully	ammonia produced
sulfate (SO_4^{2-}) [in solution]	acidify then add aqueous barium chloride <i>or</i> aqueous barium nitrate	white ppt.

Test for aqueous cations

<i>cation</i>	<i>effect of aqueous sodium hydroxide</i>	<i>effect of aqueous ammonia</i>
ammonium (NH_4^+)	ammonia produced on warming	-
copper(II) (Cu^{2+})	light blue ppt., insoluble in excess	light blue ppt., soluble in excess giving a dark blue solution
iron(II) (Fe^{2+})	green ppt., insoluble in excess	green ppt., insoluble in excess
iron(III) (Fe^{3+})	red-brown ppt., insoluble in excess	red-brown ppt., insoluble in excess
zinc (Zn^{2+})	white ppt., soluble in excess giving a colourless solution	white ppt., soluble in excess giving a colourless solution

Test for gases

<i>gas</i>	<i>test and test results</i>
ammonia (NH_3)	turns damp red litmus paper blue
carbon dioxide (CO_2)	turns limewater milky
chlorine (Cl_2)	bleaches damp litmus paper
hydrogen (H_2)	"pops" with a lighted splint
oxygen (O_2)	relights a glowing splint