



**Cambridge International Examinations**  
Cambridge International General Certificate of Secondary Education

---

**GEOGRAPHY**

**0460/43**

Paper 4 Alternative to Coursework

**May/June 2017**

INSERT

**1 hour 30 minutes**

---

**READ THESE INSTRUCTIONS FIRST**

The Insert contains Figs. 1 and 3, Photographs A and B and Table 2 for Question 1, and Fig. 5, Photograph C and Tables 5 and 6 for Question 2.

The Insert is **not** required by the Examiner.



---

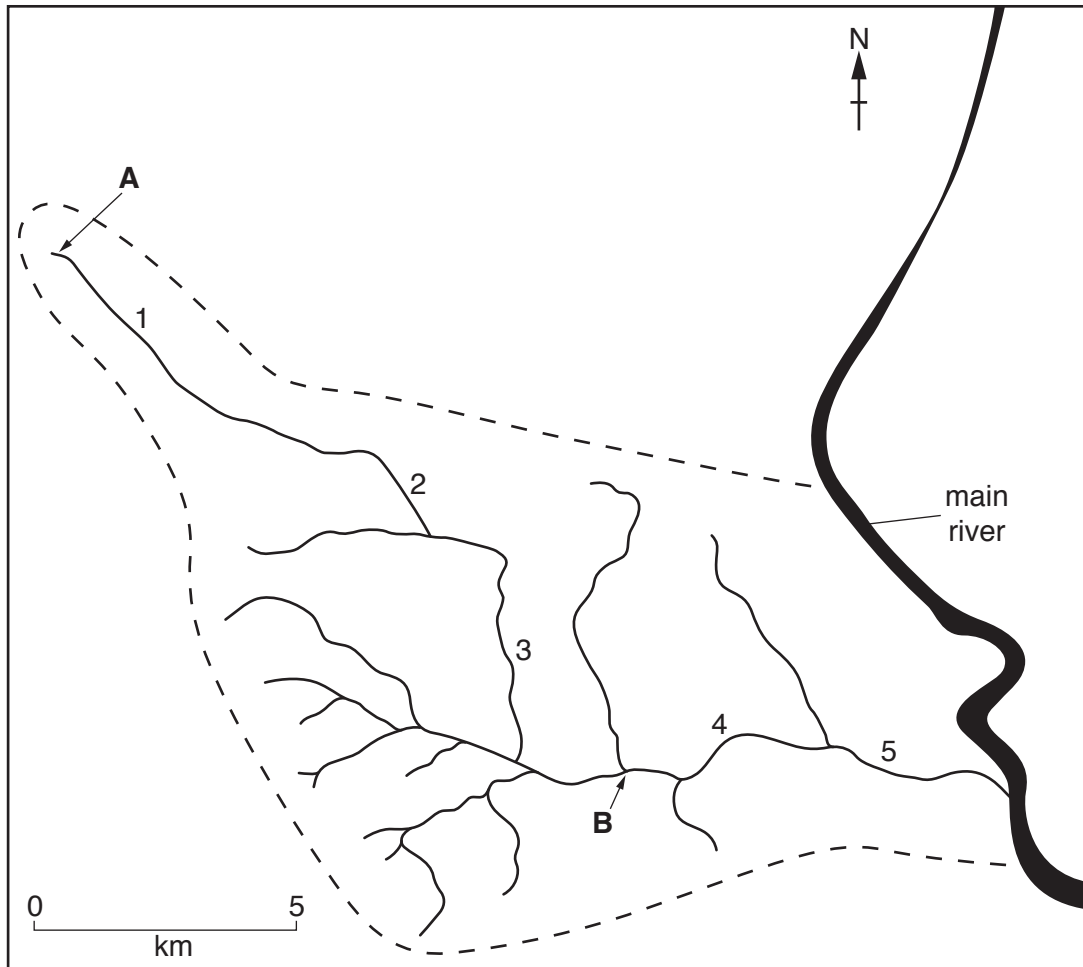
The syllabus is approved for use in England, Wales and Northern Ireland as a Cambridge International Level 1/Level 2 Certificate.

---



This document consists of **9** printed pages and **3** blank pages.

Fig. 1 for Question 1

River and drainage basin



Key

-  1 fieldwork site on river
-  edge of drainage basin

Photograph A for Question 1



Photograph B for Question 1



Fig. 3 for Question 1

Power's Scale of Roundness

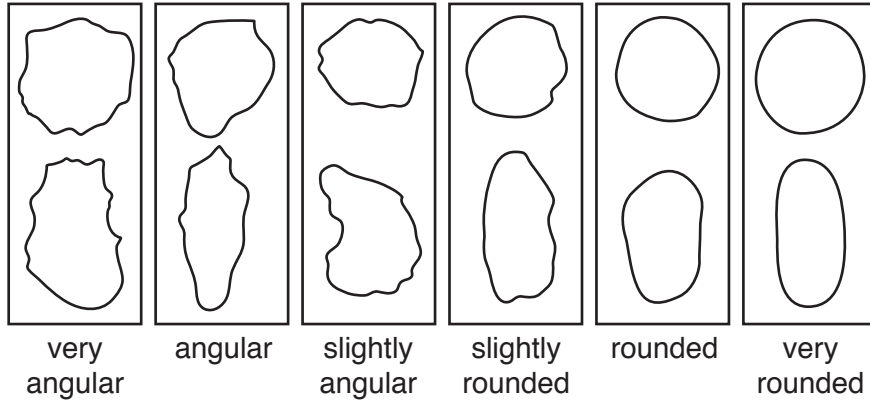


Table 2 for Question 1

## Students' results

Site	Number of pebbles					
	very angular	angular	slightly angular	slightly rounded	rounded	very rounded
1	6	6	4	4	0	0
2	9	4	6	1	0	0
3	0	2	3	12	2	1
4	0	0	3	8	7	2
5	0	2	4	9	5	0

Photograph C for Question 2



Fig. 5 for Question 2

**Questionnaire**

I'm a student at college. I am doing a survey of tourism in the city.

1. Are you a tourist in Bagan?  Yes  No

(If the answer is 'no' end the interview)

2. Which country do you come from? .....

3. Which **one** of the following most attracted you to visit Bagan?

Cultural and heritage sites, such as the temples

Hot-air balloon rides

Hot weather

People and their traditions

Variety of restaurants and nightlife

4. Which age group are you in?

0-20  21-40  41-60  Over 60

5. Which **one** of the following methods did you mainly use to research your holiday?

Internet sites

Media such as newspapers, magazines, books, television

People such as friends, family, colleagues

Travel agent

Thank you for your time



## Tables 5 and 6 for Question 2

Table 5

## Results of Questions 3 and 4 in the questionnaire

Attraction	Age group			
	0–20	21–40	41–60	over 60
Cultural and heritage sites	7	15	21	<b>19</b>
Hot-air balloon rides	1	2	2	<b>0</b>
Hot weather	1	1	1	<b>0</b>
People and their traditions	5	8	8	<b>7</b>
Restaurants and nightlife	1	1	0	<b>0</b>
Total number	15	27	32	26

Table 6

## Results of Question 5 in the questionnaire

Method	Tourists (%)			
	China	Thailand	Japan	USA
Internet sites	25	38	66	50
Media such as newspapers, magazines, books, television	0	6	0	0
People such as friends, family, colleagues	12	<b>19</b>	17	0
Travel agent	63	<b>37</b>	17	50
Total percentage	100	100	100	100





**BLANK PAGE**

---

Permission to reproduce items where third-party owned material protected by copyright is included has been sought and cleared where possible. Every reasonable effort has been made by the publisher (UCLES) to trace copyright holders, but if any items requiring clearance have unwittingly been included, the publisher will be pleased to make amends at the earliest possible opportunity.

To avoid the issue of disclosure of answer-related information to candidates, all copyright acknowledgements are reproduced online in the Cambridge International Examinations Copyright Acknowledgements Booklet. This is produced for each series of examinations and is freely available to download at [www.cie.org.uk](http://www.cie.org.uk) after the live examination series.

Cambridge International Examinations is part of the Cambridge Assessment Group. Cambridge Assessment is the brand name of University of Cambridge Local Examinations Syndicate (UCLES), which is itself a department of the University of Cambridge.