



Cambridge International Examinations
Cambridge International General Certificate of Secondary Education

GEOGRAPHY

0460/42

Paper 4 Alternative to Coursework

May/June 2016

INSERT

1 hour 30 minutes



READ THESE INSTRUCTIONS FIRST

This Insert contains Tables 1 and 2 and Fig. 3 for Question 1, and Fig. 8 and Table 7 for Question 2.

The Insert is **not** required by the Examiner.

The syllabus is approved for use in England, Wales and Northern Ireland as a Cambridge International Level 1/Level 2 Certificate.

This document consists of **6** printed pages and **2** blank pages.

Table 1 for Question 1
Results of river fieldwork

		Site 1					Average
Width of river (m)	2.4						
Distance across river from left-hand bank (m)	0.38	0.76	1.14	1.52	1.9		
Depth at each point (m)	0.25	0.3	0.31	0.32	0.19	0.27	
Velocity of river flow (m/sec)	0.4	0.22	0.3	0.42	0.1	0.29	

		Site 2					Average
Width of river (m)	3.6						
Distance across river from left-hand bank (m)	0.6	1.2	1.8	2.4	3.0		
Depth at each point (m)	0.33	0.38	0.4	0.32	0.18	0.32	
Velocity of river flow (m/sec)	0.18	0.32	0.33	0.34	0.26	0.29	

		Site 3					Average
Width of river (m)	5.2						
Distance across river from left-hand bank (m)	0.87	1.74	2.61	3.48	4.35		
Depth at each point (m)	0.4	0.54	0.52	0.32	0.19	0.39	
Velocity of river flow (m/sec)	0.95	0.79	0.47	0.38	0.29	0.58	

		Site 4					Average
Width of river (m)	9.6						
Distance across river from left-hand bank (m)	1.6	3.2	4.8	6.4	8.0		
Depth at each point (m)	0.15	0.27	0.33	0.4	0.32	0.29	
Velocity of river flow (m/sec)	0.19	0.22	0.5	0.83	0.56	0.46	

		Site 5					Average
Width of river (m)	10.4						
Distance across river from left-hand bank (m)	1.73	3.46	5.39	6.92	8.65		
Depth at each point (m)	0.49	0.63	0.7	0.67	0.34	0.57	
Velocity of river flow (m/sec)	0.02	0.06	0.41	0.44	0.13	0.21	

		Site 6					Average
Width of river (m)	7.6						
Distance across river from left-hand bank (m)	1.27	2.54	3.82	5.08	6.35		
Depth at each point (m)	0.72	0.41	0.39	0.49	0.36	0.47	
Velocity of river flow (m/sec)	0.63	0.59	0.83	0.83	0.48	0.67	

Table 2 for Question 1

Area of the river channel cross section and average velocity at the six sites

Site	Area of cross section (m ²)	Average velocity (m/sec)
1	0.65	0.29
2	1.15	0.29
3	2.03	0.58
4	2.78	0.46
5	5.93	0.21
6	3.57	0.67

Fig. 3 for Question 1

Equipment used to measure river velocity (not to scale)






Fig. 8 for Question 2

Shopping questionnaire

Excuse me; I'm a student at The Royal Academy. Please could you answer a few questions to help me with my geography fieldwork?

1. How often do you shop in the town centre?

every day (daily)

once a week (weekly)

once a month (monthly)

less than once a month (infrequently)

2. Where do you usually shop?

town centre shops

local supermarket

retail park on the edge of town

other town or city

3. What are the main advantages of shopping in the town centre? (You may give more than one answer.)

.....

.....

.....

4. What are the main disadvantages of shopping in the town centre? (You may give more than one answer.)

.....

.....

.....

Thank you very much for your help and time.

Gender

Male

Female

Age group

Under 16

16-30

31-45

46-60

Over 60

Table 7 for Question 2

Answers to Questions 3 and 4 in the questionnaire

Main advantage	Number of answers
Shops sell specialist goods	39
Friendly and helpful staff	26
Shops are never busy	18
Near to home	15
Frequent bus service to town centre	13
Total	111

Main disadvantage	Number of answers
Prices are more expensive than in shops elsewhere	77
Many shops have closed down	62
Lack of parking	56
Lack of choice when buying goods	34
No shelter against rain and cold weather	18
Total	247

BLANK PAGE

Permission to reproduce items where third-party owned material protected by copyright is included has been sought and cleared where possible. Every reasonable effort has been made by the publisher (UCLES) to trace copyright holders, but if any items requiring clearance have unwittingly been included, the publisher will be pleased to make amends at the earliest possible opportunity.

To avoid the issue of disclosure of answer-related information to candidates, all copyright acknowledgements are reproduced online in the Cambridge International Examinations Copyright Acknowledgements Booklet. This is produced for each series of examinations and is freely available to download at www.cie.org.uk after the live examination series.

Cambridge International Examinations is part of the Cambridge Assessment Group. Cambridge Assessment is the brand name of University of Cambridge Local Examinations Syndicate (UCLES), which is itself a department of the University of Cambridge.