



UNIVERSITY OF CAMBRIDGE INTERNATIONAL EXAMINATIONS  
 General Certificate of Education  
 Advanced Subsidiary Level and Advanced Level

CANDIDATE  
 NAME

CENTRE  
 NUMBER

--	--	--	--	--

CANDIDATE  
 NUMBER

--	--	--	--



**CHEMISTRY**

**9701/22**

Paper 2 Structured Questions AS Core

**May/June 2011**

**1 hour 15 minutes**

Candidates answer on the Question Paper.

Additional Materials: Data Booklet

**READ THESE INSTRUCTIONS FIRST**

Write your name, Centre number and candidate number on all the work you hand in.  
 Write in dark blue or black pen.  
 You may use a pencil for any diagrams, graphs, or rough working.  
 Do not use staples, paper clips, highlighters, glue or correction fluid.  
**DO NOT WRITE ON ANY BARCODES.**

Answer **all** questions.  
 You may lose marks if you do not show your working or if you do not use appropriate units.  
 A Data Booklet is provided.

The number of marks is given in brackets [ ] at the end of each question or part question.  
 At the end of the examination, fasten all your work securely together.

For Examiner's Use	
1	
2	
3	
4	
5	
<b>Total</b>	

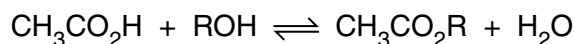
This document consists of **11** printed pages and **1** blank page.



Answer **all** the questions in the spaces provided.

For  
Examiner's  
Use

- 1 Ethanoic acid can be reacted with alcohols to form esters, an equilibrium mixture being formed.



The reaction is usually carried out in the presence of an acid catalyst.

- (a) Write an expression for the equilibrium constant,  $K_c$ , for this reaction, clearly stating the units.

$$K_c =$$

units ..... [2]

In an experiment to determine  $K_c$  a student placed together in a conical flask 0.10 mol of ethanoic acid, 0.10 mol of an alcohol ROH, and 0.005 mol of hydrogen chloride catalyst.

The flask was sealed and kept at 25 °C for seven days.

After this time, the student titrated all of the contents of the flask with 2.00 mol dm<sup>-3</sup> NaOH using phenolphthalein indicator.

At the end-point, 22.5 cm<sup>3</sup> of NaOH had been used.

- (b) (i) Calculate the amount, in moles, of NaOH used in the titration.
- (ii) What amount, in moles, of this NaOH reacted with the hydrogen chloride?
- (iii) Write a balanced equation for the reaction between ethanoic acid and NaOH.
- (iv) Hence calculate the amount, in moles, of NaOH that reacted with the ethanoic acid.

[4]

- (c) (i) Use your results from (b) to calculate the amount, in moles, of ethanoic acid present at equilibrium. Hence complete the table below.

For  
Examiner's  
Use

	$\text{CH}_3\text{CO}_2\text{H}$	$\text{ROH}$	$\text{CH}_3\text{CO}_2\text{R}$	$\text{H}_2\text{O}$
initial amount/mol	0.10	0.10	0	0
equilibrium amount/mol				

- (ii) Use your results to calculate a value for  $K_c$  for this reaction.

[3]

- (d) Esters are hydrolysed by sodium hydroxide. During the titration, sodium hydroxide reacts with ethanoic acid and the hydrogen chloride, but not with the ester.

Suggest a reason for this.

.....  
..... [1]

- (e) What would be the effect, if any, on the amount of ester present if all of the water were removed from the flask and the flask kept for a further week at  $25^\circ\text{C}$ ?

Explain your answer.

.....  
.....  
..... [2]

[Total: 12]

- 2 Halogenoalkanes have been widely used as aerosol propellants, refrigerants and solvents for many years.

For  
Examiner's  
Use

Fluoroethane,  $\text{CH}_3\text{CH}_2\text{F}$ , has been used as a refrigerant. It may be made by reacting ethene with hydrogen fluoride.

You are to calculate a value for the C–F bond energy in fluoroethane.

- (a) Use relevant bond energies from the *Data Booklet*, and the equation below to calculate a value for the bond energy of the C–F bond.



C–F bond energy = .....  $\text{kJ mol}^{-1}$  [4]

- (b) Another halogenoalkane which was used as a refrigerant, and also as an aerosol propellant, is dichlorodifluoromethane,  $\text{CCl}_2\text{F}_2$ .

State **two** reasons why compounds such as  $\text{CH}_3\text{CH}_2\text{F}$  and  $\text{CCl}_2\text{F}_2$  have been used as aerosol propellants and refrigerants.

.....  
 ..... [2]

$\text{CCl}_2\text{F}_2$  is one of many chlorofluorocarbon compounds responsible for damage to the ozone layer in the stratosphere.

For  
Examiner's  
Use

- (c) By using relevant data from the *Data Booklet*, and your answer to (a) suggest why  $\text{CCl}_2\text{F}_2$  is responsible for damage to the ozone layer in the stratosphere whereas  $\text{CH}_3\text{CH}_2\text{F}$  is not.

.....  
 .....  
 ..... [2]

Both  $\text{CH}_3\text{CH}_2\text{F}$  and  $\text{CCl}_2\text{F}_2$  are greenhouse gases.

The 'enhanced greenhouse effect' is of great concern to the international community.

- (d) (i) What is meant by the term *enhanced greenhouse effect*?

.....  
 .....  
 .....

- (ii) Water vapour is the most abundant greenhouse gas.

What is the second most abundant greenhouse gas?

..... [3]

A greenhouse gas which is present in very small amounts in the atmosphere is sulfur hexafluoride,  $\text{SF}_6$ , which is used in high voltage electrical switchgear.

- (e) What shape is the  $\text{SF}_6$  molecule?

..... [1]

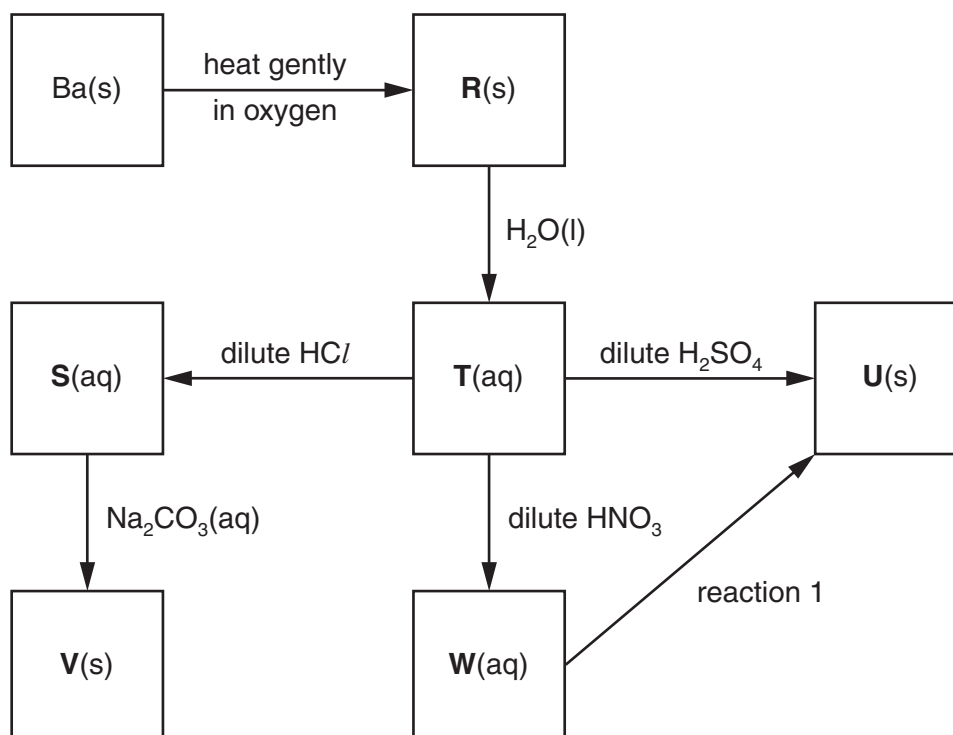
[Total: 12]

- 3 Barium, proton number 56, is a Group II element which occurs in nature as the carbonate or sulfate.

The element was first isolated by Sir Humphry Davy in 1808.

Some reactions of barium and its compounds are shown in the reaction scheme below.

For  
Examiner's  
Use



- (a) State the formula of **each** of the barium compounds **R** to **W**.

**R** .....

**S** .....

**T** .....

**U** .....

**V** .....

**W** .....

[6]

- (b) (i) Write balanced equations for the following reactions.

compound **T** to compound **W**

.....

the roasting of **V** in air

.....

- (ii) Suggest a gaseous reagent for the conversion of **T** into **V** and write a balanced equation for the reaction.

reagent .....

equation .....

[4]

- (c) Suggest the formula of an aqueous reagent, other than an acid, for reaction 1.

.....

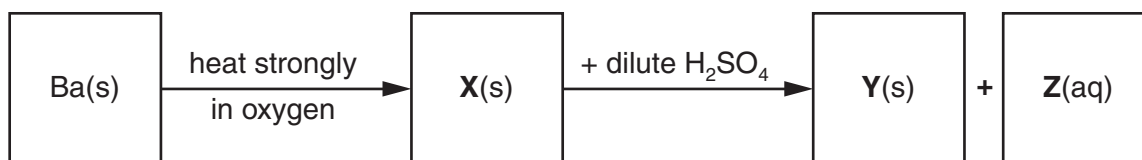
[1]

When barium is heated strongly in oxygen, an oxide **X** is formed.

The oxide **X** contains 18.9% of oxygen by mass.

The oxide **X** reacts with dilute sulfuric acid in a 1:1 ratio.

Two products, one insoluble and one soluble, are formed.



- (d) (i) Calculate the empirical formula of **X**.

- (ii) Suggest the identity of the solid **Y**.

.....

- (iii) Use your answers to (i) and (ii) to construct an equation for the reaction of **X** with H<sub>2</sub>SO<sub>4</sub>.

..... [4]

[Total: 15]





4 Chlorine is manufactured by electrolysis from brine, concentrated aqueous sodium chloride.

- (a) (i) Describe, with the aid of a fully labelled diagram, the industrial electrolysis of brine in a diaphragm cell. State what each electrode is made of and show clearly the inlet for the brine and the outlets for the products.

For  
Examiner's  
Use

- (ii) Write a half-equation, with state symbols, for the reaction at **each** electrode.

anode .....

cathode .....

- (iii) Name the chemical that is produced in solution in this electrolytic process.

.....

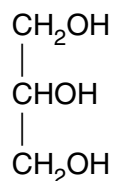
[7]

[Total: 7]

- 5 Although there are many different types of food eaten around the world, animal fats and/or vegetable oils are commonly used in cooking.

For  
Examiner's  
Use

Animal fats and vegetable oils are usually glyceryl esters, that is esters of glycerol, propane-1,2,3-triol.



Many animal fats contain esters of stearic acid,  $\text{CH}_3(\text{CH}_2)_{16}\text{CO}_2\text{H}$ .

Vegetable oils often contain esters of oleic acid,  $\text{CH}_3(\text{CH}_2)_7\text{CH}=\text{CH}(\text{CH}_2)_7\text{CO}_2\text{H}$ .

- (a) Draw the structural formula of the glyceryl ester formed when one molecule of glycerol is completely esterified with stearic acid.

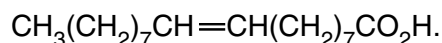
[1]

- (b) What reagent(s) would you use, in a school or college laboratory, to obtain a small sample of oleic acid,  $\text{C}_{17}\text{H}_{33}\text{CO}_2\text{H}$ , from the glyceryl ester present in a vegetable oil?

.....

[1]

Oleic acid is the *cis* isomer and elaidic acid the *trans* isomer of



- (c) By using this formula, draw the structural formula of elaidic acid, clearly showing the stereochemistry.

[1]

Oleic and elaidic acids are examples of mono-unsaturated acids. Many vegetable oils contain esters of polyunsaturated fatty acids. Such oils are often hydrogenated to form esters containing saturated or mono-unsaturated fatty acids.

For  
Examiner's  
Use

(d) (i) Suggest the meaning of the term *polyunsaturated fatty acid*.

.....  
.....

(ii) What reagent and condition(s) are used for the hydrogenation of an unsaturated fatty acid?

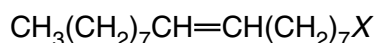
reagent .....

condition(s) ..... [3]

In cooking, unsaturated fats are often oxidised to give aldehydes or ketones.

(e) (i) Give the structural formulae of the two aldehydes formed by the partial oxidation of the unsaturated fat below.

In the structure, X, represents the rest of the fat molecule.



(ii) Name the reagent you would use to show that the product contained **either** an aldehyde **or** a ketone. What change would be seen?

reagent .....

observation .....

(iii) What reagent would you use to **confirm** the presence of an aldehyde? What change would be seen?

reagent .....

observation .....

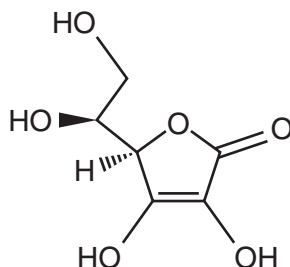
[6]

Animal fats and vegetable oils can become rancid because of oxidation. The rancid fat or oil has an unpleasant smell and taste.

For  
Examiner's  
Use

Antioxidants are used to prevent the spoilage of many foodstuffs by oxidation.

One antioxidant that is widely used is vitamin C, ascorbic acid.



ascorbic acid

- (f) (i) How many chiral carbon atoms are present in one molecule of ascorbic acid?  
If none, write 'none'.

.....

- (ii) The ascorbic acid molecule contains three functional groups.

Two of these are alcohol (primary and secondary) and alkene.

What is the name of the third functional group?

.....

[2]

[Total: 14]